

Indian Institute of Information Technology, Design and Manufacturing, Kancheepuram  
Melakkottaiyur, Off Vandalur-Kelambakkam Road, Chennai-600127

**Non-Teaching Recruitment – Question Paper**

Name of the Candidate:	
Application No.:	
Name of the Post:	Junior Technician (ME)
Exam Level:	Practical Test (Level-3)
Date of Exam:	07 Dec 2025
Duration:	120 Minutes
Total Marks:	40

**Instructions to the Candidates:**

1. Candidates are not allowed to carry any paper, notes, books, gadgets etc. to the examination hall. Any candidate found using or in possession of such unauthorized materials or involved in copying or impersonation or adopting unfair means or behaviors will be disqualified and may be subjected to penal action.
2. This Question paper contains printed pages with **03** questions. Answer all the questions.
3. Duration for **(Q1 + Q2)** is 60 min. Duration for **Q3** is 60 min.
4. Question paper with marking **"A"** need to do the Q3 in 1<sup>st</sup> half; (Q1+Q2) in 2<sup>nd</sup> half.
5. Question paper with marking **"B"** need to do the (Q1+Q2) in 1<sup>st</sup> half; Q3 in 2<sup>nd</sup> half.
6. Candidates SHOULD write their application number on their workpiece and need to take photographs while submitting the workpiece for evaluation.
7. All dimensions are in mm. Tolerance is  $\pm 0.5$  mm for all dimensions.

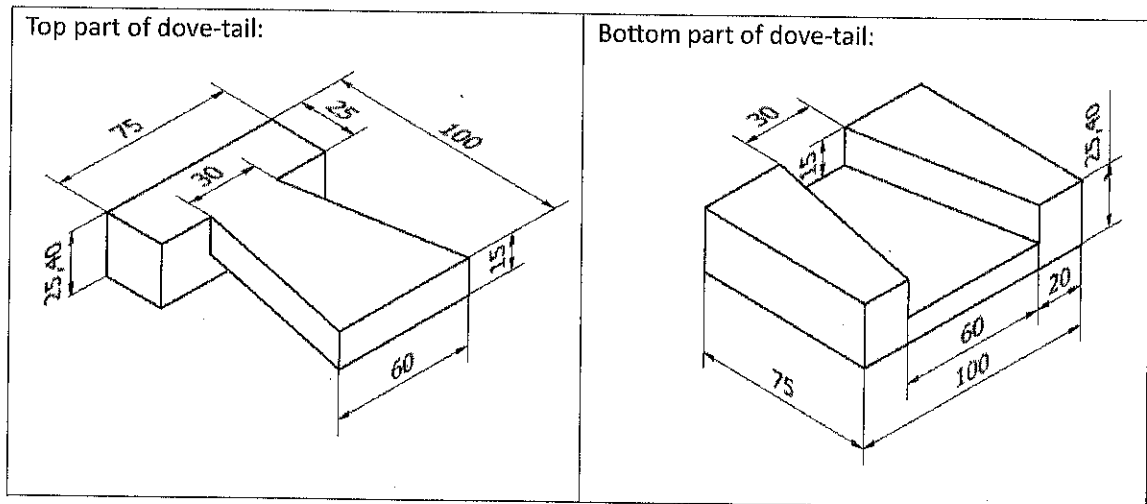
\*\*\*\*\*

**Q1:** Identify the displayed tools and write their name in the following table using **PEN: (5 Marks)**

Display No.	Tool Name
1	
2	
3	
4	
5	

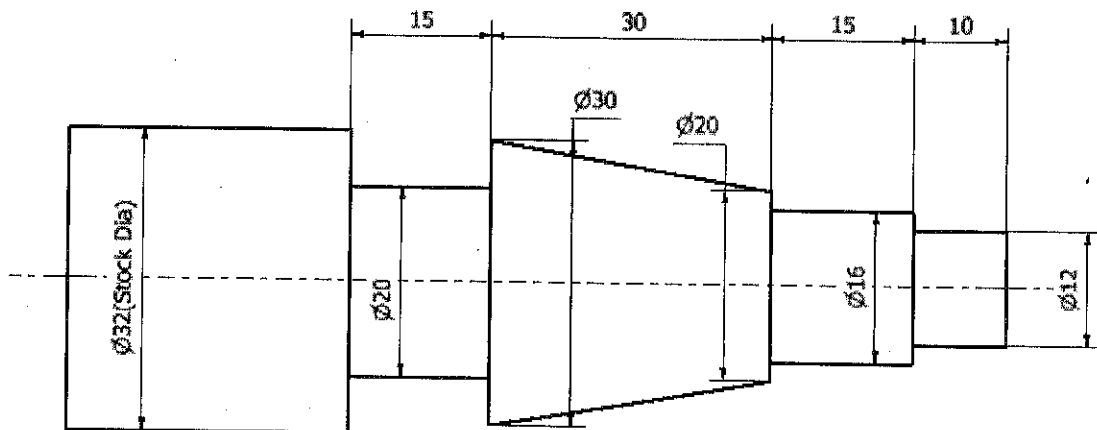
(Q2 and Q3 are in the next page)

**Q2: Prepare the dove-tail fitting as given below: (15 Marks)**



**Q3: Prepare the job as given below: (20 Marks)**

A



Indian Institute of Information Technology, Design and Manufacturing, Kancheepuram  
Melakkottaiyur, Off Vandalur-Kelambakkam Road, Chennai-600127

### Non-Teaching Recruitment – Question Paper

Name of the Candidate:	
Application No.:	
Name of the Post:	Junior Technician (ME)
Exam Level:	Practical Test (Level-3)
Date of Exam:	07 Dec 2025
Duration:	120 Minutes
Total Marks:	40

#### Instructions to the Candidates:

1. Candidates are not allowed to carry any paper, notes, books, gadgets etc. to the examination hall. Any candidate found using or in possession of such unauthorized materials or involved in copying or impersonation or adopting unfair means or behaviors will be disqualified and may be subjected to penal action.
2. This Question paper contains printed pages with **03** questions. Answer all the questions.
3. Duration for **(Q1 + Q2)** is 60 min. Duration for **Q3** is 60 min.
4. Question paper with marking **"A"** need to do the Q3 in 1<sup>st</sup> half; (Q1+Q2) in 2<sup>nd</sup> half.
5. Question paper with marking **"B"** need to do the (Q1+Q2) in 1<sup>st</sup> half; Q3 in 2<sup>nd</sup> half.
6. Candidates SHOULD write their application number on their workpiece and need to take photographs while submitting the workpiece for evaluation.
7. All dimensions are in mm. Tolerance is  $\pm 0.5$  mm for all dimensions.

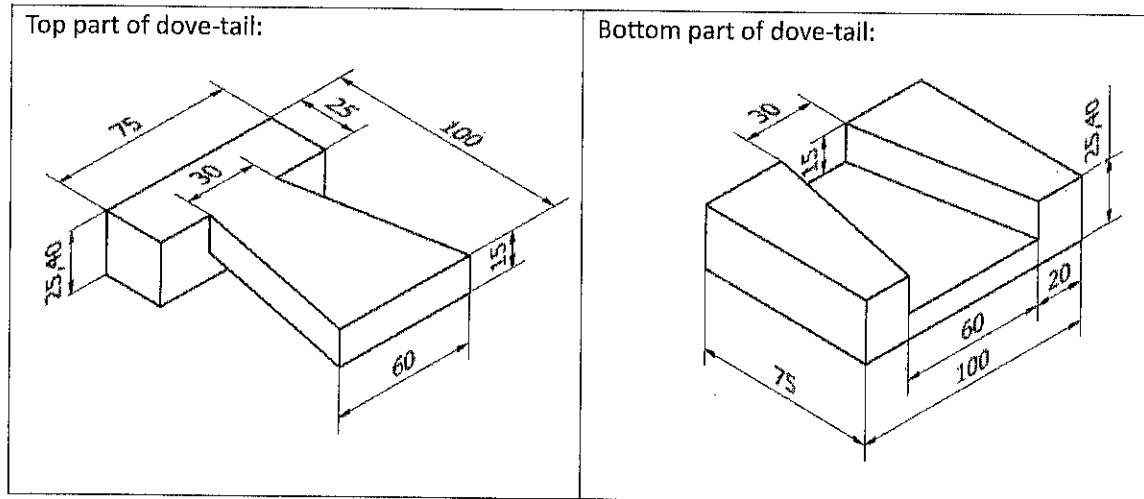
\*\*\*\*\*

**Q1:** Identify the displayed tools and write their name in the following table using **PEN: (5 Marks)**

Display No.	Tool Name
1	
2	
3	
4	
5	

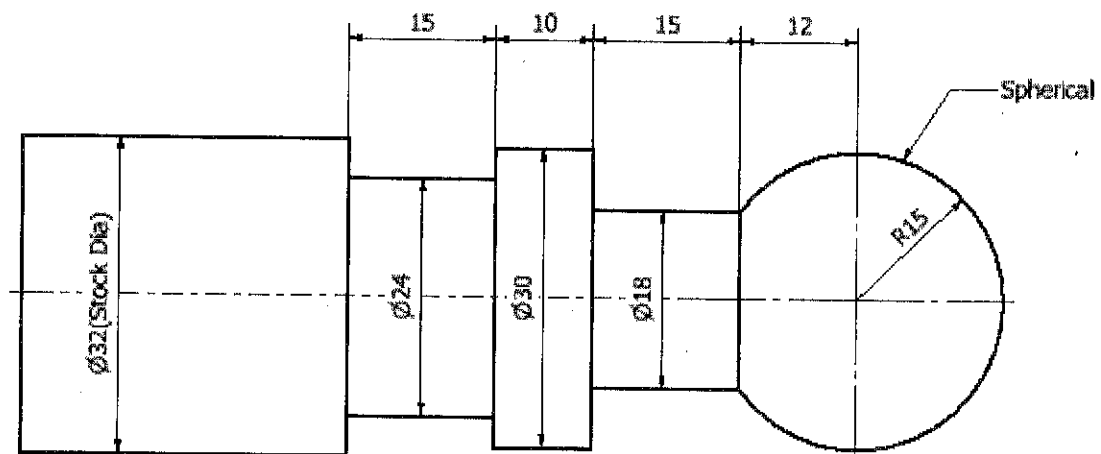
(Q2 and Q3 are in the next page)

**Q2: Prepare the dove-tail fitting as given below: (15 Marks)**



**Q3: Prepare the job as given below: (20 Marks)**

**A**



Indian Institute of Information Technology, Design and Manufacturing, Kancheepuram  
Melakkottaiyur, Off Vandalur-Kelambakkam Road, Chennai-600127

### Non-Teaching Recruitment – Question Paper

Name of the Candidate:	
Application No.:	
Name of the Post:	Junior Technician (ME)
Exam Level:	Practical Test (Level-3)
Date of Exam:	07 Dec 2025
Duration:	120 Minutes
Total Marks:	40

#### Instructions to the Candidates:

1. Candidates are not allowed to carry any paper, notes, books, gadgets etc. to the examination hall. Any candidate found using or in possession of such unauthorized materials or involved in copying or impersonation or adopting unfair means or behaviors will be disqualified and may be subjected to penal action.
2. This Question paper contains printed pages with **03** questions. Answer all the questions.
3. Duration for **(Q1 + Q2)** is 60 min. Duration for **Q3** is 60 min.
4. Question paper with marking **"A"** need to do the Q3 in 1<sup>st</sup> half; (Q1+Q2) in 2<sup>nd</sup> half.
5. Question paper with marking **"B"** need to do the (Q1+Q2) in 1<sup>st</sup> half; Q3 in 2<sup>nd</sup> half.
6. Candidates SHOULD write their application number on their workpiece and need to take photographs while submitting the workpiece for evaluation.
7. All dimensions are in mm. Tolerance is  $\pm 0.5$  mm for all dimensions.

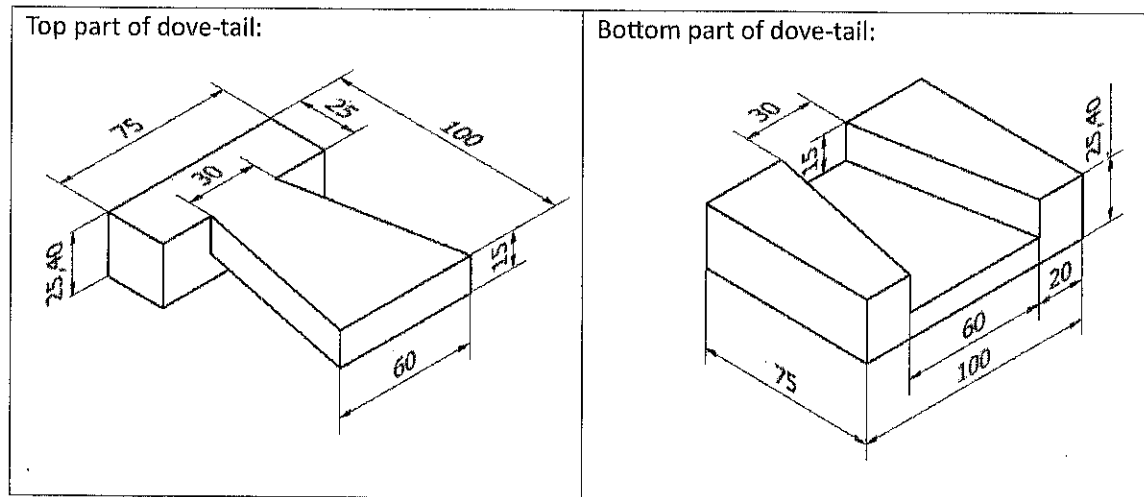
\*\*\*\*\*

**Q1:** Identify the displayed tools and write their name in the following table using **PEN: (5 Marks)**

Display No.	Tool Name
1	
2	
3	
4	
5	

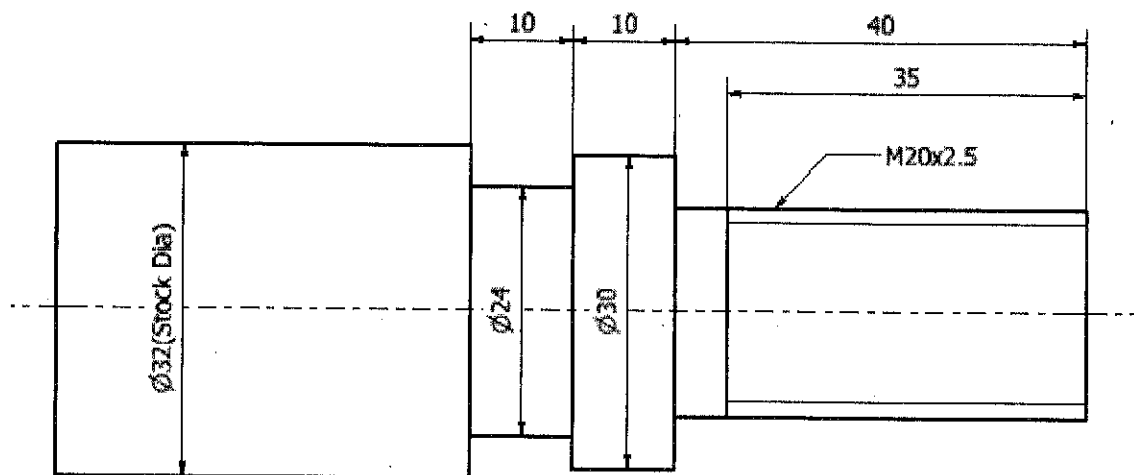
(Q2 and Q3 are in the next page)

**Q2: Prepare the dove-tail fitting as given below: (15 Marks)**



**Q3: Prepare the job as given below: (20 Marks)**

A



Indian Institute of Information Technology, Design and Manufacturing, Kancheepuram  
Melakkottaiyur, Off Vandalur-Kelambakkam Road, Chennai-600127

### Non-Teaching Recruitment – Question Paper

Name of the Candidate:	
Application No.:	
Name of the Post:	Junior Technician (ME)
Exam Level:	Practical Test (Level-3)
Date of Exam:	07 Dec 2025
Duration:	120 Minutes
Total Marks:	40

#### Instructions to the Candidates:

1. Candidates are not allowed to carry any paper, notes, books, gadgets etc. to the examination hall. Any candidate found using or in possession of such unauthorized materials or involved in copying or impersonation or adopting unfair means or behaviors will be disqualified and may be subjected to penal action.
2. This Question paper contains printed pages with **03** questions. Answer all the questions.
3. Duration for **(Q1 + Q2)** is 60 min. Duration for **Q3** is 60 min.
4. Question paper with marking **"A"** need to do the Q3 in 1<sup>st</sup> half; (Q1+Q2) in 2<sup>nd</sup> half.
5. Question paper with marking **"B"** need to do the (Q1+Q2) in 1<sup>st</sup> half; Q3 in 2<sup>nd</sup> half.
6. Candidates SHOULD write their application number on their workpiece and need to take photographs while submitting the workpiece for evaluation.
7. All dimensions are in mm. Tolerance is  $\pm 0.5$  mm for all dimensions.

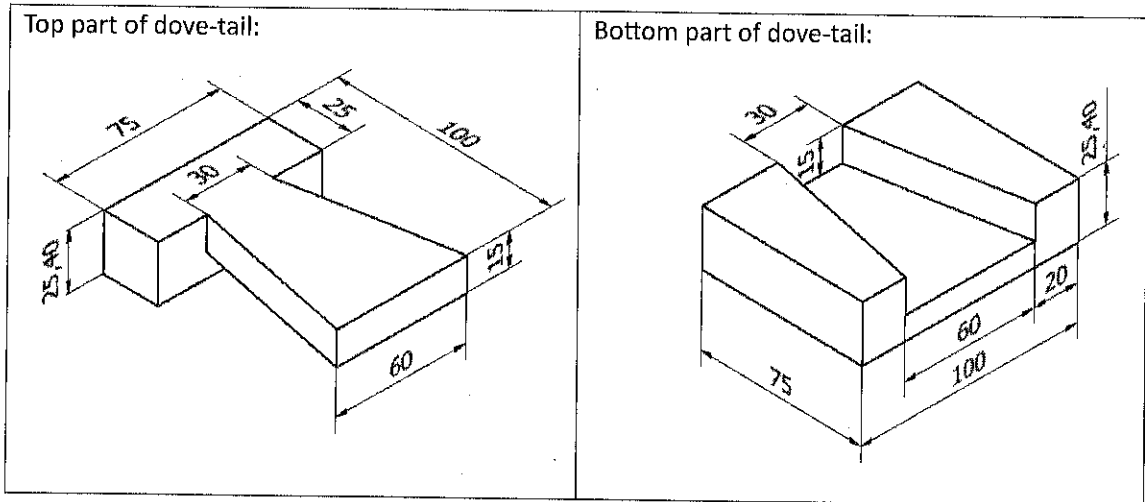
\*\*\*\*\*

**Q1:** Identify the displayed tools and write their name in the following table using **PEN: (5 Marks)**

Display No.	Tool Name
1	
2	
3	
4	
5	

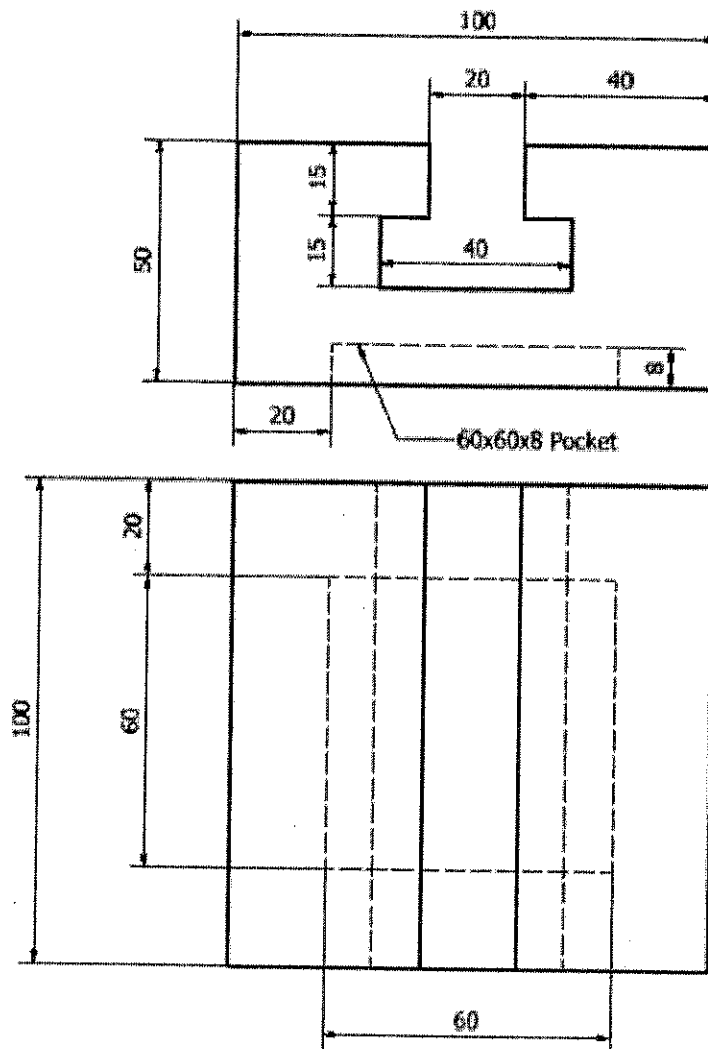
(Q2 and Q3 are in the next page)

**Q2: Prepare the dove-tail fitting as given below: (15 Marks)**



**Q3: Prepare the job as given below: (20 Marks)**

A





Indian Institute of Information Technology, Design and Manufacturing, Kancheepuram  
Melakkottaiyur, Off Vandalur-Kelambakkam Road, Chennai-600127

### Non-Teaching Recruitment – Question Paper

Name of the Candidate:	
Application No.:	
Name of the Post:	Junior Technician (ME)
Exam Level:	Practical Test (Level-3)
Date of Exam:	07 Dec 2025
Duration:	120 Minutes
Total Marks:	40

#### Instructions to the Candidates:

1. Candidates are not allowed to carry any paper, notes, books, gadgets etc. to the examination hall. Any candidate found using or in possession of such unauthorized materials or involved in copying or impersonation or adopting unfair means or behaviors will be disqualified and may be subjected to penal action.
2. This Question paper contains printed pages with **03** questions. Answer all the questions.
3. Duration for **(Q1 + Q2)** is 60 min. Duration for **Q3** is 60 min.
4. Question paper with marking **"A"** need to do the Q3 in 1<sup>st</sup> half; (Q1+Q2) in 2<sup>nd</sup> half.
5. Question paper with marking **"B"** need to do the (Q1+Q2) in 1<sup>st</sup> half; Q3 in 2<sup>nd</sup> half.
6. Candidates SHOULD write their application number on their workpiece and need to take photographs while submitting the workpiece for evaluation.
7. All dimensions are in mm. Tolerance is  $\pm 0.5$  mm for all dimensions.

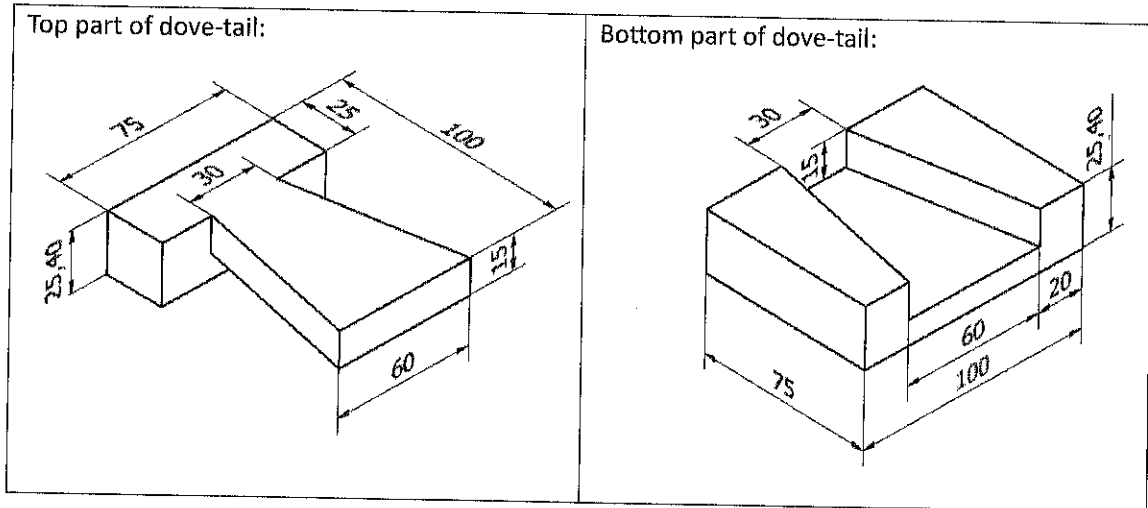
\*\*\*\*\*

**Q1:** Identify the displayed tools and write their name in the following table using **PEN: (5 Marks)**

Display No.	Tool Name
1	
2	
3	
4	
5	

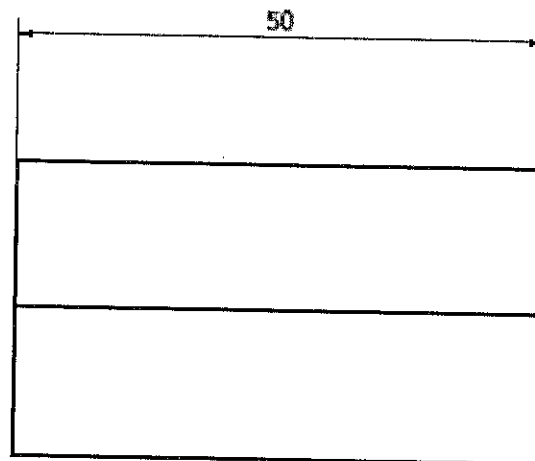
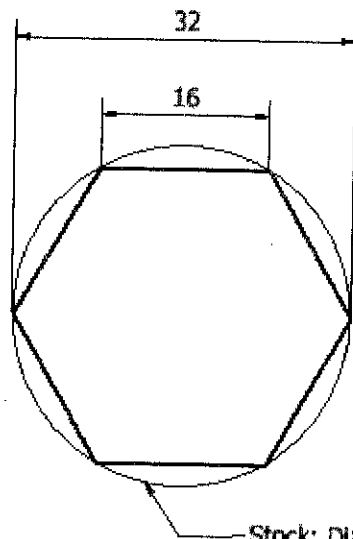
(Q2 and Q3 are in the next page)

**Q2: Prepare the dove-tail fitting as given below: (15 Marks)**



**Q3: Prepare the job as given below: (20 Marks)**

**A**



Stock: Dia 32; Length 50 mm

Indian Institute of Information Technology, Design and Manufacturing, Kancheepuram  
Melakkottaiyur, Off Vandalur-Kelambakkam Road, Chennai-600127

### Non-Teaching Recruitment – Question Paper

Name of the Candidate:	
Application No.:	
Name of the Post:	Junior Technician (ME)
Exam Level:	Practical Test (Level-3)
Date of Exam:	07 Dec 2025
Duration:	120 Minutes
Total Marks:	40

#### Instructions to the Candidates:

1. Candidates are not allowed to carry any paper, notes, books, gadgets etc. to the examination hall. Any candidate found using or in possession of such unauthorized materials or involved in copying or impersonation or adopting unfair means or behaviors will be disqualified and may be subjected to penal action.
2. This Question paper contains printed pages with **03** questions. Answer all the questions.
3. Duration for **(Q1 + Q2)** is 60 min. Duration for **Q3** is 60 min.
4. Question paper with marking **"A"** need to do the Q3 in 1<sup>st</sup> half; (Q1+Q2) in 2<sup>nd</sup> half.
5. Question paper with marking **"B"** need to do the (Q1+Q2) in 1<sup>st</sup> half; Q3 in 2<sup>nd</sup> half.
6. Candidates SHOULD write their application number on their workpiece and need to take photographs while submitting the workpiece for evaluation.
7. All dimensions are in mm. Tolerance is  $\pm 0.5$  mm for all dimensions.

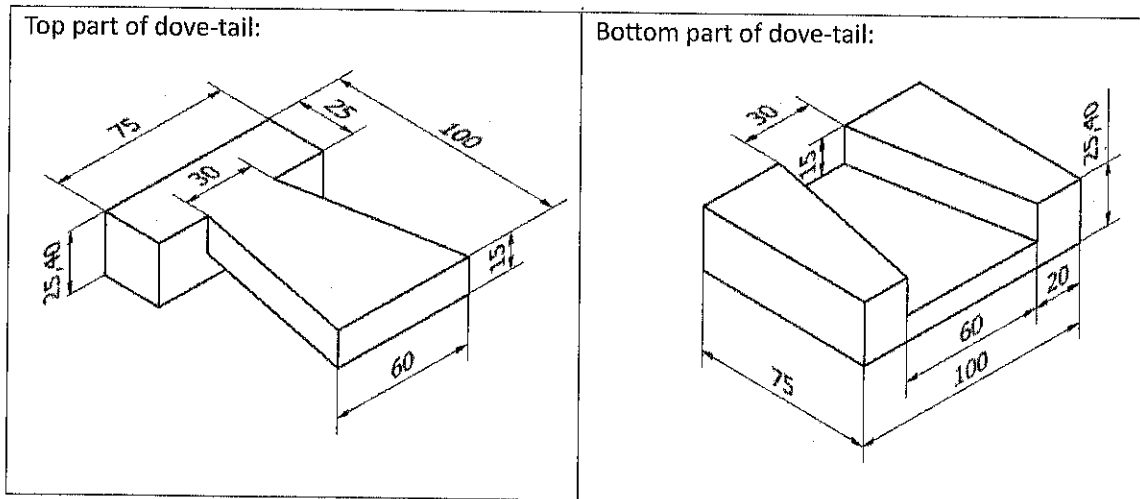
\*\*\*\*\*

**Q1:** Identify the displayed tools and write their name in the following table using **PEN: (5 Marks)**

Display No.	Tool Name
1	
2	
3	
4	
5	

(Q2 and Q3 are in the next page)

**Q2: Prepare the dove-tail fitting as given below: (15 Marks)**

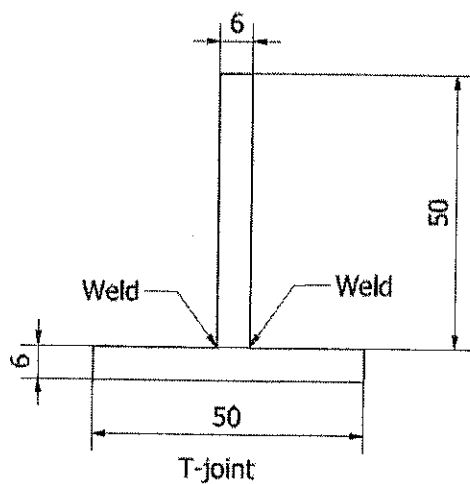
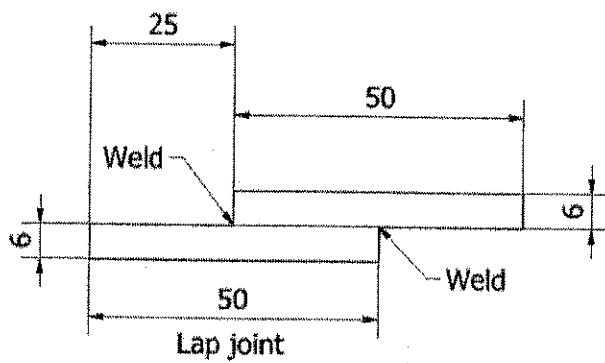


**Q3: Prepare the job as given below: (20 Marks)**

A

Using welding process join the given plates by:

- a. Lap Joint
- b. T-Joint



Indian Institute of Information Technology, Design and Manufacturing, Kancheepuram  
Melakkottaiyur, Off Vandalur-Kelambakkam Road, Chennai-600127

### Non-Teaching Recruitment – Question Paper

Name of the Candidate:	
Application No.:	
Name of the Post:	Junior Technician (ME)
Exam Level:	Practical Test (Level-3)
Date of Exam:	07 Dec 2025
Duration:	120 Minutes
Total Marks:	40

#### Instructions to the Candidates:

1. Candidates are not allowed to carry any paper, notes, books, gadgets etc. to the examination hall. Any candidate found using or in possession of such unauthorized materials or involved in copying or impersonation or adopting unfair means or behaviors will be disqualified and may be subjected to penal action.
2. This Question paper contains printed pages with **03** questions. Answer all the questions.
3. Duration for **(Q1 + Q2)** is 60 min. Duration for **Q3** is 60 min.
4. Question paper with marking **"A"** need to do the Q3 in 1<sup>st</sup> half; (Q1+Q2) in 2<sup>nd</sup> half.
5. Question paper with marking **"B"** need to do the (Q1+Q2) in 1<sup>st</sup> half; Q3 in 2<sup>nd</sup> half.
6. Candidates **SHOULD** write their application number on their workpiece and need to take photographs while submitting the workpiece for evaluation.
7. All dimensions are in mm. Tolerance is  $\pm 0.5$  mm for all dimensions.

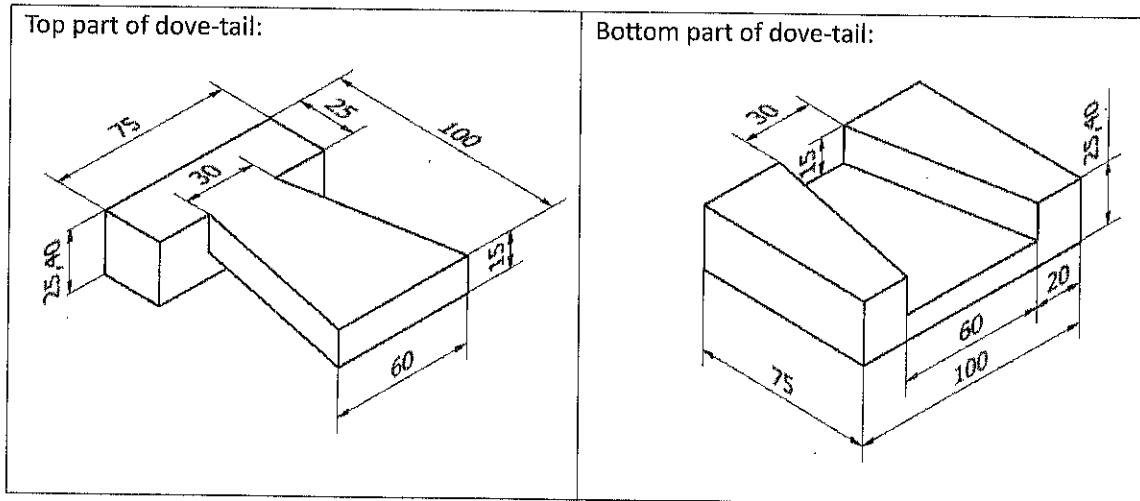
\*\*\*\*\*

**Q1:** Identify the displayed tools and write their name in the following table using **PEN: (5 Marks)**

Display No.	Tool Name
1	
2	
3	
4	
5	

(Q2 and Q3 are in the next page)

**Q2: Prepare the dove-tail fitting as given below: (15 Marks)**

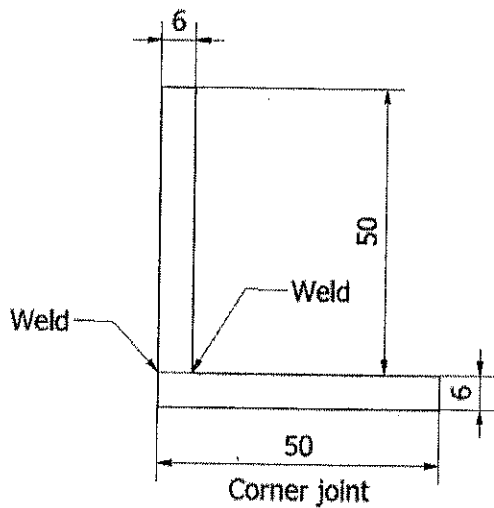
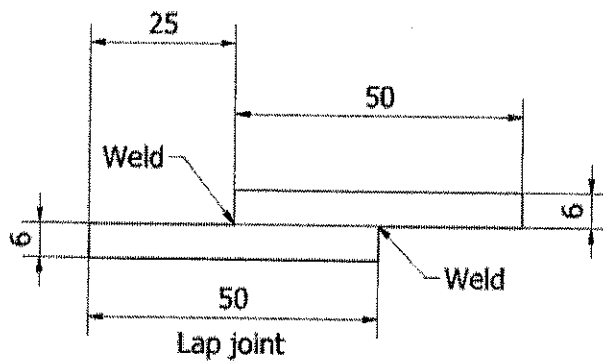


**Q3: Prepare the job as given below: (20 Marks)**

A

Using welding process join the given plates by:

- a. Lap Joint
- b. Corner Joint



Indian Institute of Information Technology, Design and Manufacturing, Kancheepuram  
Melakkottaiyur, Off Vandalur-Kelambakkam Road, Chennai-600127

### Non-Teaching Recruitment – Question Paper

Name of the Candidate:	
Application No.:	
Name of the Post:	Junior Technician (ME)
Exam Level:	Practical Test (Level-3)
Date of Exam:	07 Dec 2025
Duration:	120 Minutes
Total Marks:	40

#### Instructions to the Candidates:

1. Candidates are not allowed to carry any paper, notes, books, gadgets etc. to the examination hall. Any candidate found using or in possession of such unauthorized materials or involved in copying or impersonation or adopting unfair means or behaviors will be disqualified and may be subjected to penal action.
2. This Question paper contains printed pages with **03** questions. Answer all the questions.
3. Duration for **(Q1 + Q2)** is 60 min. Duration for **Q3** is 60 min.
4. Question paper with marking "**A**" need to do the Q3 in 1<sup>st</sup> half; (Q1+Q2) in 2<sup>nd</sup> half.
5. Question paper with marking "**B**" need to do the (Q1+Q2) in 1<sup>st</sup> half; Q3 in 2<sup>nd</sup> half.
6. Candidates SHOULD write their application number on their workpiece and need to take photographs while submitting the workpiece for evaluation.
7. All dimensions are in mm. Tolerance is  $\pm 0.5$  mm for all dimensions.

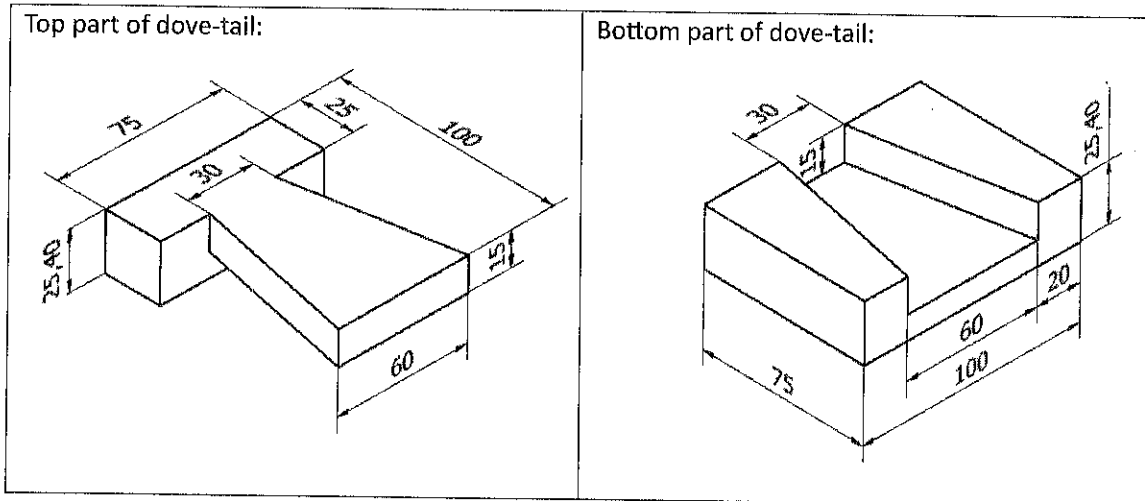
\*\*\*\*\*

**Q1:** Identify the displayed tools and write their name in the following table using **PEN: (5 Marks)**

Display No.	Tool Name
1	
2	
3	
4	
5	

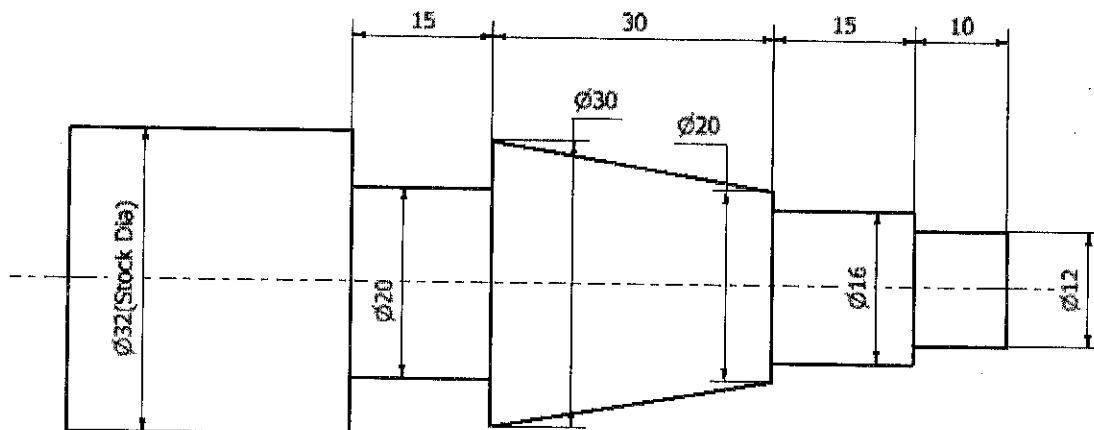
(Q2 and Q3 are in the next page)

**Q2: Prepare the dove-tail fitting as given below: (15 Marks)**



**Q3: Prepare the job as given below: (20 Marks)**

**B**





Indian Institute of Information Technology, Design and Manufacturing, Kancheepuram  
Melakkottaiyur, Off Vandalur-Kelambakkam Road, Chennai-600127

### Non-Teaching Recruitment – Question Paper

Name of the Candidate:	
Application No.:	
Name of the Post:	Junior Technician (ME)
Exam Level:	Practical Test (Level-3)
Date of Exam:	07 Dec 2025
Duration:	120 Minutes
Total Marks:	40

#### Instructions to the Candidates:

1. Candidates are not allowed to carry any paper, notes, books, gadgets etc. to the examination hall. Any candidate found using or in possession of such unauthorized materials or involved in copying or impersonation or adopting unfair means or behaviors will be disqualified and may be subjected to penal action.
2. This Question paper contains printed pages with **03** questions. Answer all the questions.
3. Duration for **(Q1 + Q2)** is 60 min. Duration for **Q3** is 60 min.
4. Question paper with marking **"A"** need to do the Q3 in 1<sup>st</sup> half; (Q1+Q2) in 2<sup>nd</sup> half.
5. Question paper with marking **"B"** need to do the (Q1+Q2) in 1<sup>st</sup> half; Q3 in 2<sup>nd</sup> half.
6. Candidates SHOULD write their application number on their workpiece and need to take photographs while submitting the workpiece for evaluation.
7. All dimensions are in mm. Tolerance is  $\pm 0.5$  mm for all dimensions.

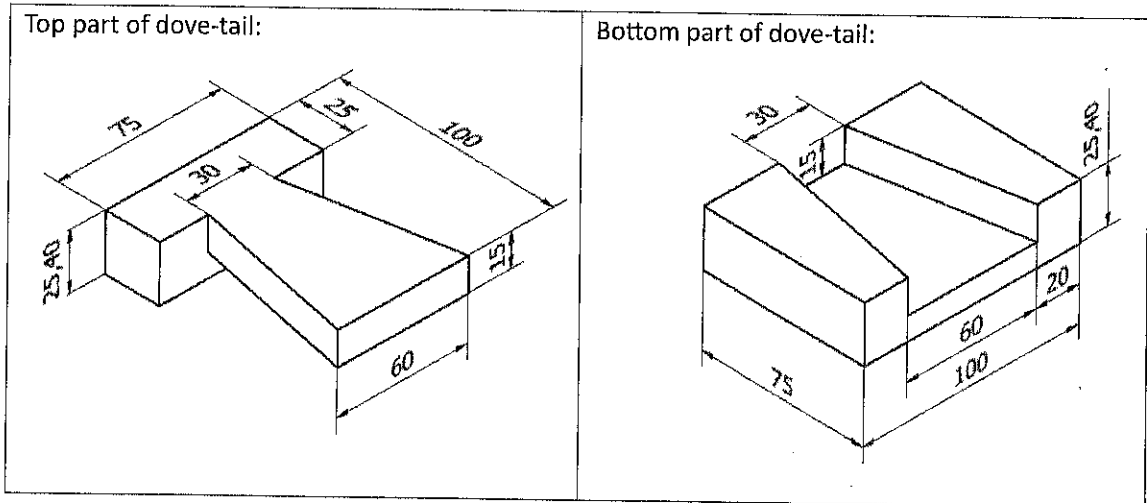
\*\*\*\*\*

**Q1:** Identify the displayed tools and write their name in the following table using **PEN: (5 Marks)**

Display No.	Tool Name
1	
2	
3	
4	
5	

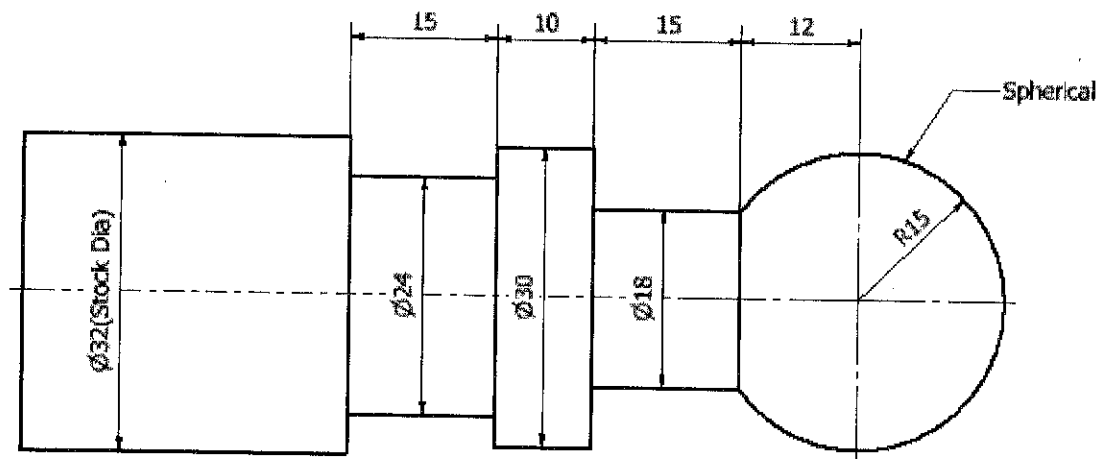
(Q2 and Q3 are in the next page)

**Q2: Prepare the dove-tail fitting as given below: (15 Marks)**



**Q3: Prepare the job as given below: (20 Marks)**

**B**



Indian Institute of Information Technology, Design and Manufacturing, Kancheepuram  
Melakkottaiyur, Off Vandalur-Kelambakkam Road, Chennai-600127

### Non-Teaching Recruitment – Question Paper

Name of the Candidate:	
Application No.:	
Name of the Post:	Junior Technician (ME)
Exam Level:	Practical Test (Level-3)
Date of Exam:	07 Dec 2025
Duration:	120 Minutes
Total Marks:	40

Instructions to the Candidates:

1. Candidates are not allowed to carry any paper, notes, books, gadgets etc. to the examination hall. Any candidate found using or in possession of such unauthorized materials or involved in copying or impersonation or adopting unfair means or behaviors will be disqualified and may be subjected to penal action.
2. This Question paper contains printed pages with **03** questions. Answer all the questions.
3. Duration for **(Q1 + Q2)** is 60 min. Duration for **Q3** is 60 min.
4. Question paper with marking **"A"** need to do the Q3 in 1<sup>st</sup> half; (Q1+Q2) in 2<sup>nd</sup> half.
5. Question paper with marking **"B"** need to do the (Q1+Q2) in 1<sup>st</sup> half; Q3 in 2<sup>nd</sup> half.
6. Candidates SHOULD write their application number on their workpiece and need to take photographs while submitting the workpiece for evaluation.
7. All dimensions are in mm. Tolerance is  $\pm 0.5$  mm for all dimensions.

\*\*\*\*\*

**Q1:** Identify the displayed tools and write their name in the following table using **PEN: (5 Marks)**

Display No.	Tool Name
1	
2	
3	
4	
5	

(Q2 and Q3 are in the next page)



Indian Institute of Information Technology, Design and Manufacturing, Kancheepuram  
Melakkottaiyur, Off Vandalur-Kelambakkam Road, Chennai-600127

### Non-Teaching Recruitment – Question Paper

Name of the Candidate:	
Application No.:	
Name of the Post:	Junior Technician (ME)
Exam Level:	Practical Test (Level-3)
Date of Exam:	07 Dec 2025
Duration:	120 Minutes
Total Marks:	40

#### Instructions to the Candidates:

1. Candidates are not allowed to carry any paper, notes, books, gadgets etc. to the examination hall. Any candidate found using or in possession of such unauthorized materials or involved in copying or impersonation or adopting unfair means or behaviors will be disqualified and may be subjected to penal action.
2. This Question paper contains printed pages with **03** questions. Answer all the questions.
3. Duration for **(Q1 + Q2)** is 60 min. Duration for **Q3** is 60 min.
4. Question paper with marking "**A**" need to do the Q3 in 1<sup>st</sup> half; (Q1+Q2) in 2<sup>nd</sup> half.
5. Question paper with marking "**B**" need to do the (Q1+Q2) in 1<sup>st</sup> half; Q3 in 2<sup>nd</sup> half.
6. Candidates SHOULD write their application number on their workpiece and need to take photographs while submitting the workpiece for evaluation.
7. All dimensions are in mm. Tolerance is  $\pm 0.5$  mm for all dimensions.

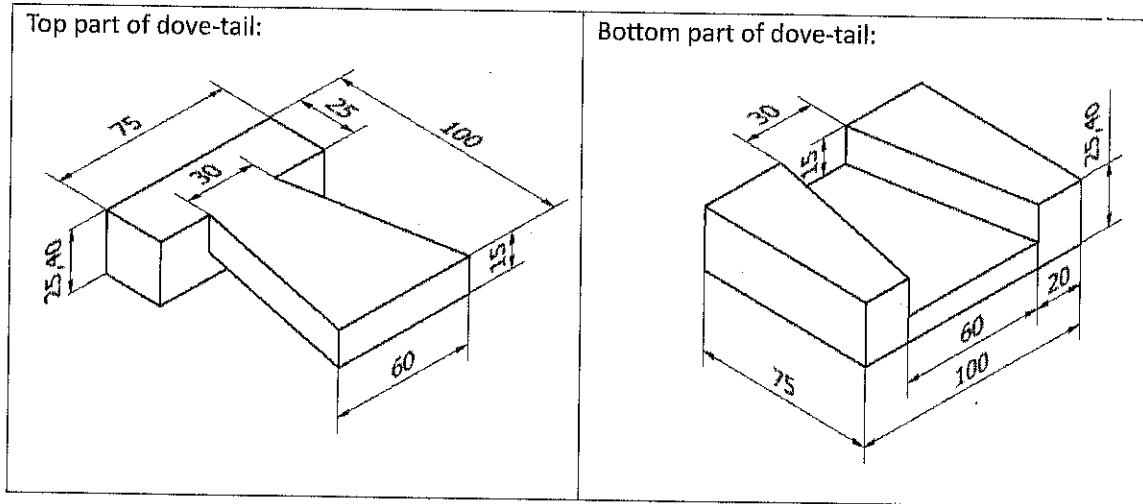
\*\*\*\*\*

**Q1:** Identify the displayed tools and write their name in the following table using **PEN: (5 Marks)**

Display No.	Tool Name
1	
2	
3	
4	
5	

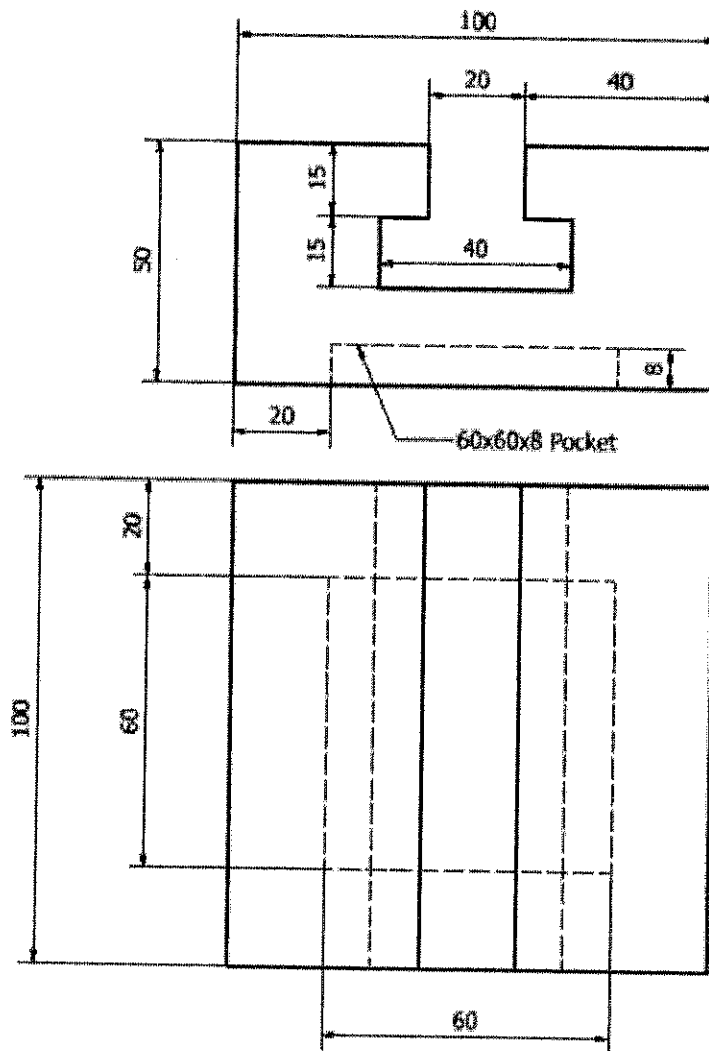
(Q2 and Q3 are in the next page)

**Q2: Prepare the dove-tail fitting as given below: (15 Marks)**



**Q3: Prepare the job as given below: (20 Marks)**

B



Indian Institute of Information Technology, Design and Manufacturing, Kancheepuram  
Melakkottaiyur, Off Vandalur-Kelambakkam Road, Chennai-600127

### Non-Teaching Recruitment – Question Paper

Name of the Candidate:	
Application No.:	
Name of the Post:	Junior Technician (ME)
Exam Level:	Practical Test (Level-3)
Date of Exam:	07 Dec 2025
Duration:	120 Minutes
Total Marks:	40

#### Instructions to the Candidates:

1. Candidates are not allowed to carry any paper, notes, books, gadgets etc. to the examination hall. Any candidate found using or in possession of such unauthorized materials or involved in copying or impersonation or adopting unfair means or behaviors will be disqualified and may be subjected to penal action.
2. This Question paper contains printed pages with **03** questions. Answer all the questions.
3. Duration for **(Q1 + Q2)** is 60 min. Duration for **Q3** is 60 min.
4. Question paper with marking "**A**" need to do the Q3 in 1<sup>st</sup> half; (Q1+Q2) in 2<sup>nd</sup> half.
5. Question paper with marking "**B**" need to do the (Q1+Q2) in 1<sup>st</sup> half; Q3 in 2<sup>nd</sup> half.
6. Candidates SHOULD write their application number on their workpiece and need to take photographs while submitting the workpiece for evaluation.
7. All dimensions are in mm. Tolerance is  $\pm 0.5$  mm for all dimensions.

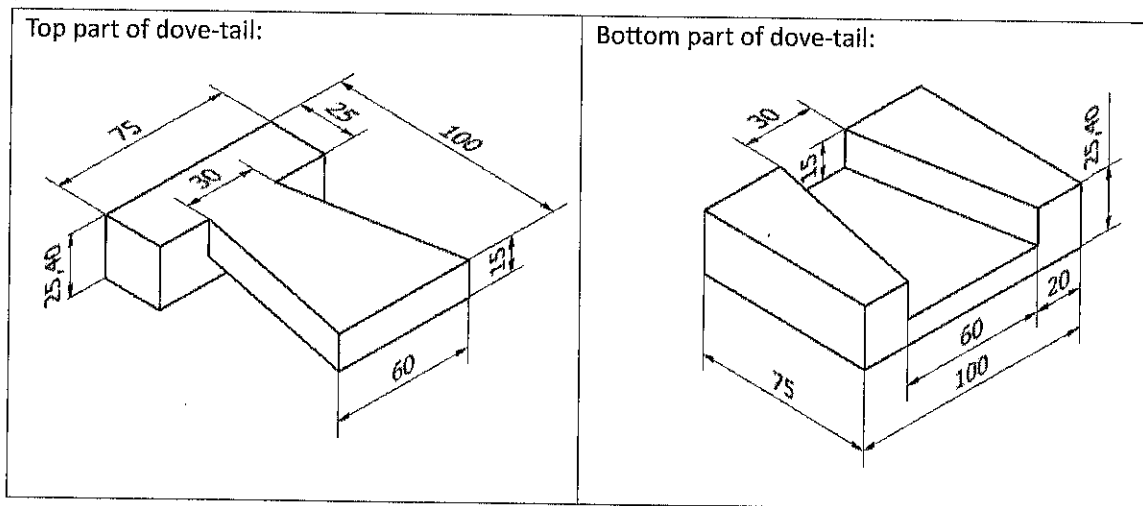
\*\*\*\*\*

**Q1:** Identify the displayed tools and write their name in the following table using **PEN: (5 Marks)**

Display No.	Tool Name
1	
2	
3	
4	
5	

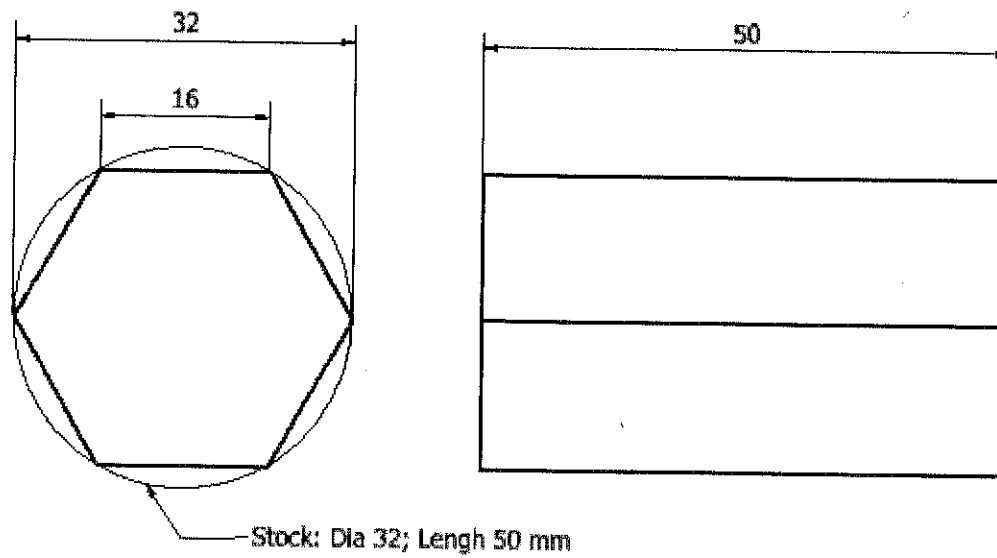
(Q2 and Q3 are in the next page)

**Q2: Prepare the dove-tail fitting as given below: (15 Marks)**



**Q3: Prepare the job as given below: (20 Marks)**

**B**





Indian Institute of Information Technology, Design and Manufacturing, Kancheepuram  
Melakkottaiyur, Off Vandalur-Kelambakkam Road, Chennai-600127

### Non-Teaching Recruitment – Question Paper

Name of the Candidate:	
Application No.:	
Name of the Post:	Junior Technician (ME)
Exam Level:	Practical Test (Level-3)
Date of Exam:	07 Dec 2025
Duration:	120 Minutes
Total Marks:	40

#### Instructions to the Candidates:

1. Candidates are not allowed to carry any paper, notes, books, gadgets etc. to the examination hall. Any candidate found using or in possession of such unauthorized materials or involved in copying or impersonation or adopting unfair means or behaviors will be disqualified and may be subjected to penal action.
2. This Question paper contains printed pages with **03** questions. Answer all the questions.
3. Duration for **(Q1 + Q2)** is 60 min. Duration for **Q3** is 60 min.
4. Question paper with marking **"A"** need to do the Q3 in 1<sup>st</sup> half; (Q1+Q2) in 2<sup>nd</sup> half.
5. Question paper with marking **"B"** need to do the (Q1+Q2) in 1<sup>st</sup> half; Q3 in 2<sup>nd</sup> half.
6. Candidates SHOULD write their application number on their workpiece and need to take photographs while submitting the workpiece for evaluation.
7. All dimensions are in mm. Tolerance is  $\pm 0.5$  mm for all dimensions.

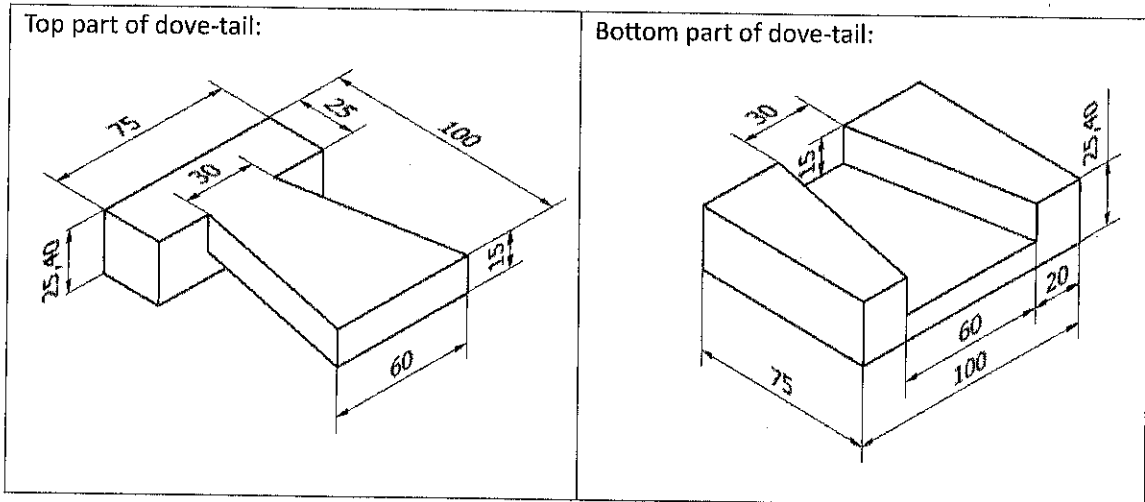
\*\*\*\*\*

**Q1:** Identify the displayed tools and write their name in the following table using **PEN: (5 Marks)**

Display No.	Tool Name
1	
2	
3	
4	
5	

(Q2 and Q3 are in the next page)

**Q2: Prepare the dove-tail fitting as given below: (15 Marks)**

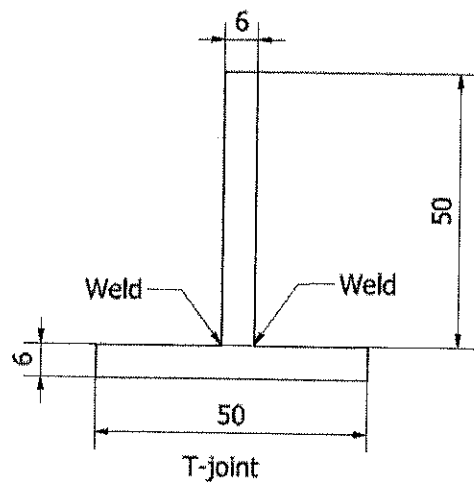
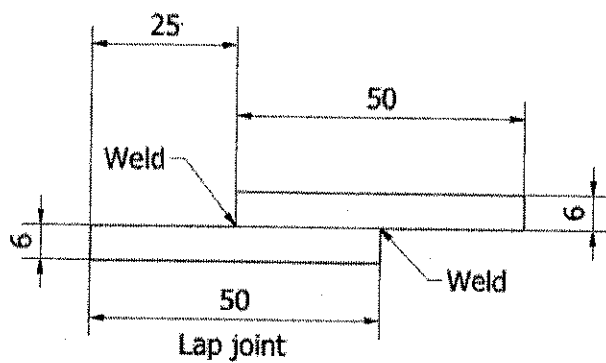


**Q3: Prepare the job as given below: (20 Marks)**

**B**

Using welding process join the given plates by:

- c. Lap Joint
- d. T-Joint



Indian Institute of Information Technology, Design and Manufacturing, Kancheepuram  
Melakkottaiyur, Off Vandalur-Kelambakkam Road, Chennai-600127

### Non-Teaching Recruitment – Question Paper

Name of the Candidate:	
Application No.:	
Name of the Post:	Junior Technician (ME)
Exam Level:	Practical Test (Level-3)
Date of Exam:	07 Dec 2025
Duration:	120 Minutes
Total Marks:	40

#### Instructions to the Candidates:

1. Candidates are not allowed to carry any paper, notes, books, gadgets etc. to the examination hall. Any candidate found using or in possession of such unauthorized materials or involved in copying or impersonation or adopting unfair means or behaviors will be disqualified and may be subjected to penal action.
2. This Question paper contains printed pages with **Q3** questions. Answer all the questions.
3. Duration for **(Q1 + Q2)** is 60 min. Duration for **Q3** is 60 min.
4. Question paper with marking "A" need to do the Q3 in 1<sup>st</sup> half; (Q1+Q2) in 2<sup>nd</sup> half.
5. Question paper with marking "B" need to do the (Q1+Q2) in 1<sup>st</sup> half; Q3 in 2<sup>nd</sup> half.
6. Candidates SHOULD write their application number on their workpiece and need to take photographs while submitting the workpiece for evaluation.
7. All dimensions are in mm. Tolerance is  $\pm 0.5$  mm for all dimensions.

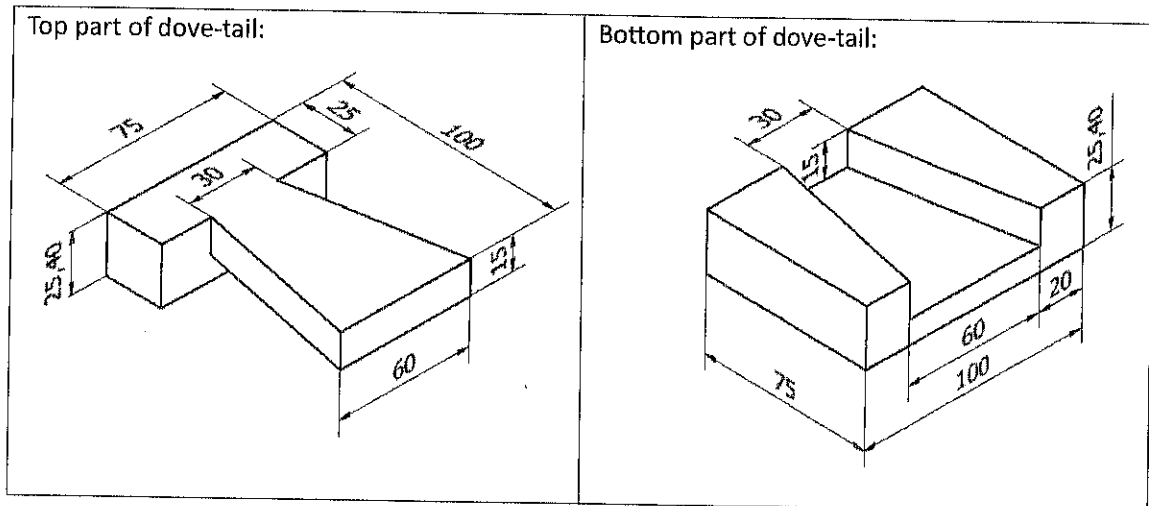
\*\*\*\*\*

**Q1:** Identify the displayed tools and write their name in the following table using **PEN: (5 Marks)**

Display No.	Tool Name
1	
2	
3	
4	
5	

(Q2 and Q3 are in the next page)

**Q2: Prepare the dove-tail fitting as given below: (15 Marks)**



**Q3: Prepare the job as given below: (20 Marks)**

Using welding process join the given plates by:

**B**

